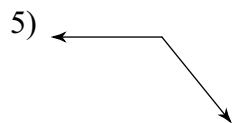
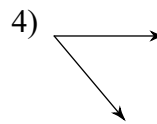
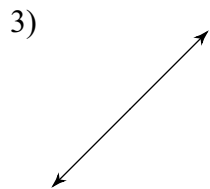
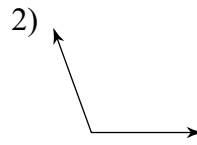
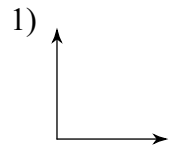


**Classify each angle as acute, obtuse, right, or straight.**



6)  $113^\circ$

7)  $10^\circ$

8)  $71^\circ$

9)  $120^\circ$

10)  $90^\circ$

**Draw and label an angle to fit each description.**

11) an obtuse angle,  $\angle M$

12) an acute angle,  $\angle H$

13) an obtuse angle,  $\angle 4$

14) an obtuse angle,  $\angle 9$

15) a straight angle,  $\angle LMN$

16) an acute angle,  $\angle FED$

17) an acute angle,  $\angle Y$

18) an acute angle,  $\angle NML$

19) a right angle,  $\angle QRS$

20) an obtuse angle,  $\angle XWV$