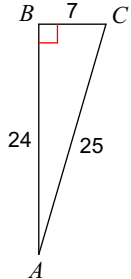
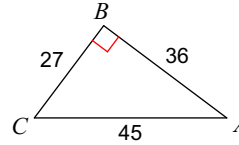
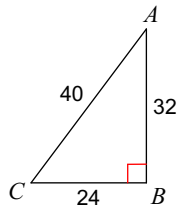
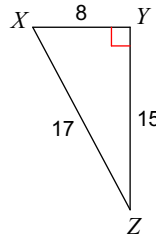
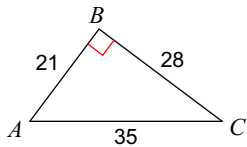
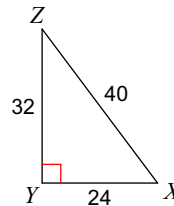
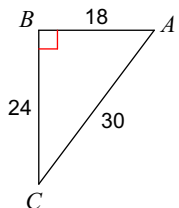
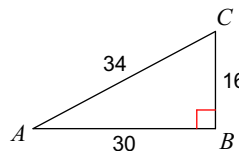


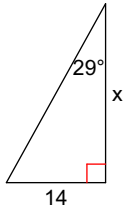
CFU-Tangent

Find the value of each trigonometric ratio to the nearest ten-thousandth.

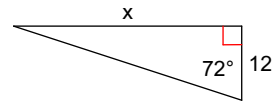
1) $\tan A$ 2) $\tan A$ 3) $\tan C$ 4) $\tan X$ 5) $\tan A$ 6) $\tan Z$ 7) $\tan C$ 8) $\tan A$ 

Find the missing side. Round to the nearest tenth.

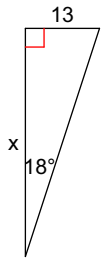
9)



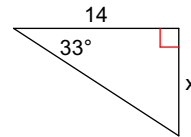
10)



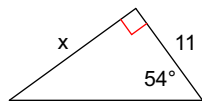
11)



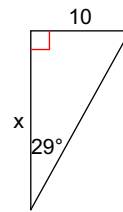
12)



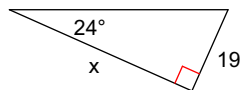
13)



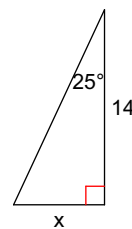
14)



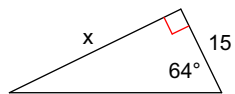
15)



16)



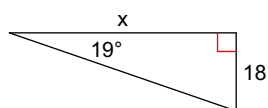
17)



18)



19)



20)

